



Surname \_\_\_\_\_

Other Names \_\_\_\_\_

Centre Number \_\_\_\_\_

Candidate Number \_\_\_\_\_

Candidate Signature \_\_\_\_\_

**GCSE**

**COMBINED SCIENCE: TRILOGY**

**H**

Higher Tier

Physics Paper 2H

**8464/P/2H**

Friday 14 June 2019      Morning

Time allowed: 1 hour 15 minutes

**For this paper you must have:**

- a protractor
- a ruler
- a scientific calculator
- the Physics Equations Sheet (enclosed).

**At the top of the page, write your surname and other names, your centre number, your candidate number and add your signature.**

**[Turn over]**



**BLANK PAGE**



## **INSTRUCTIONS**

- **Use black ink or black ball-point pen.**
- **Answer ALL questions in the spaces provided.**
- **Do all rough work in this book. Cross through any work you do not want to be marked.**
- **In all calculations, show clearly how you work out your answer.**

## **INFORMATION**

- **The maximum mark for this paper is 70.**
- **The marks for questions are shown in brackets.**
- **You are expected to use a calculator where appropriate.**
- **You are reminded of the need for good English and clear presentation in your answers.**

**DO NOT TURN OVER UNTIL TOLD TO DO SO**



**01**

**FIGURE 1** shows a runner using a smart watch and a mobile phone to monitor her run.

**FIGURE 1**



**BLANK PAGE**

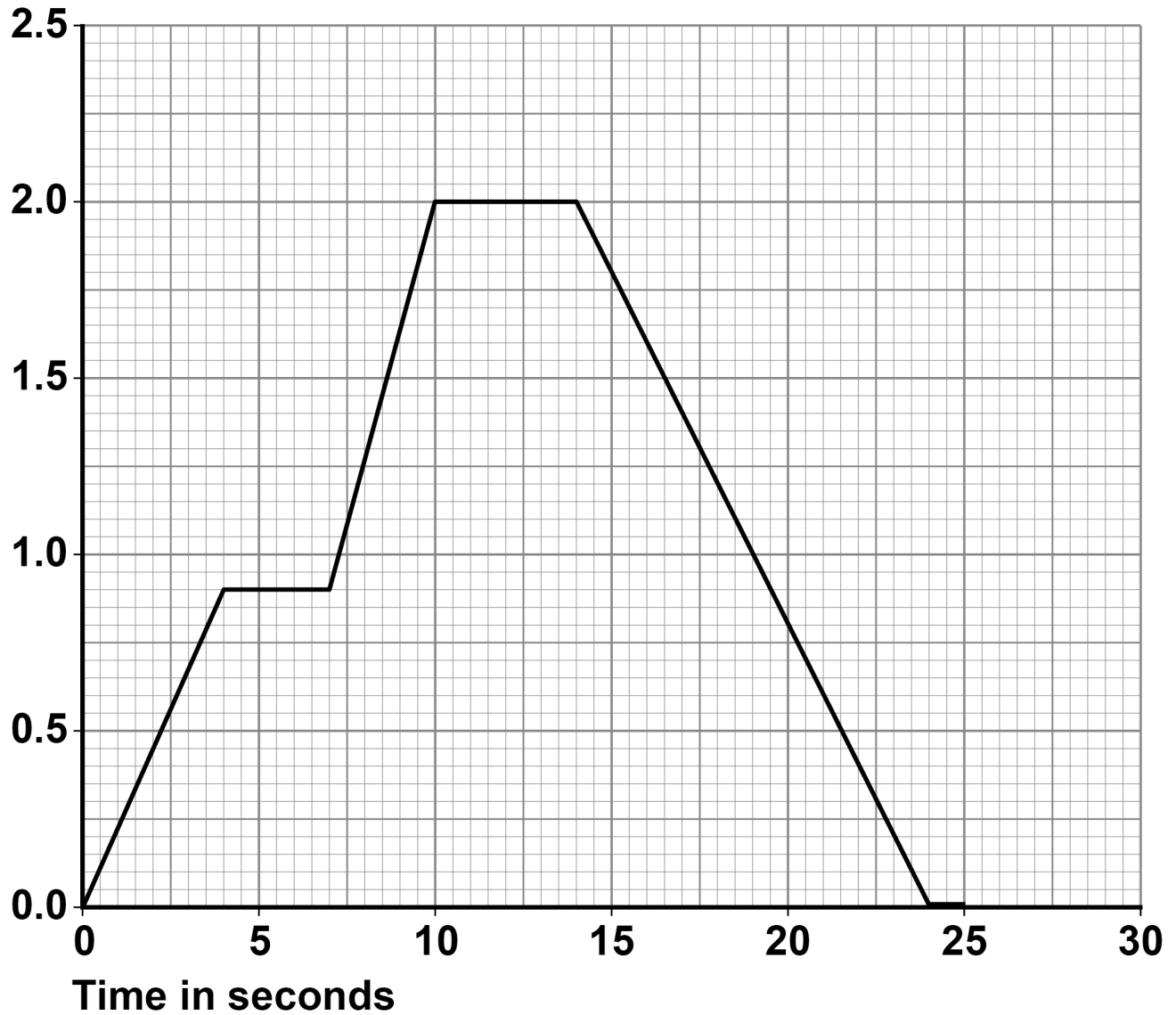
**[Turn over]**



FIGURE 2 is a velocity–time graph for part of the runner’s warm-up.

FIGURE 2

Velocity  
in m/s



**01.1** Determine the total time for which the velocity of the runner was increasing. [2 marks]

---

---

---

Time = \_\_\_\_\_ s

**01.2** Determine the deceleration of the runner. [2 marks]

---

---

---

---

---

---

---

Deceleration = \_\_\_\_\_  $\text{m/s}^2$

[Turn over]



The smart watch and mobile phone are connected to each other by a system called Bluetooth.

Bluetooth is wireless and uses electromagnetic waves for communication.

- 0 1 . 3** Suggest why the phone and watch being connected by a wireless system is an advantage when running. [1 mark]

---

---

---

- 0 1 . 4** Write down the equation that links frequency, wave speed and wavelength. [1 mark]

---

---





**01.5** The electromagnetic waves have a frequency of 2 400 000 000 Hz

The speed of electromagnetic waves is 300 000 000 m/s

Calculate the wavelength of the electromagnetic waves. [3 marks]

---

---

---

---

---

---

---

---

---

---

---

**Wavelength = \_\_\_\_\_ m**

**[Turn over]**



**01.6** TABLE 1 shows some information about four types of Bluetooth.

TABLE 1

Type	Power in milliwatts	Range in metres
1	100	100
2	2.50	10.0
3	1.00	1.00
4	0.50	0.50

Mobile phones use type 2 Bluetooth to communicate with other devices.

Suggest TWO reasons why. [2 marks]

1 \_\_\_\_\_

\_\_\_\_\_

\_\_\_\_\_

2 \_\_\_\_\_

\_\_\_\_\_

\_\_\_\_\_



**BLANK PAGE**

**[Turn over]**



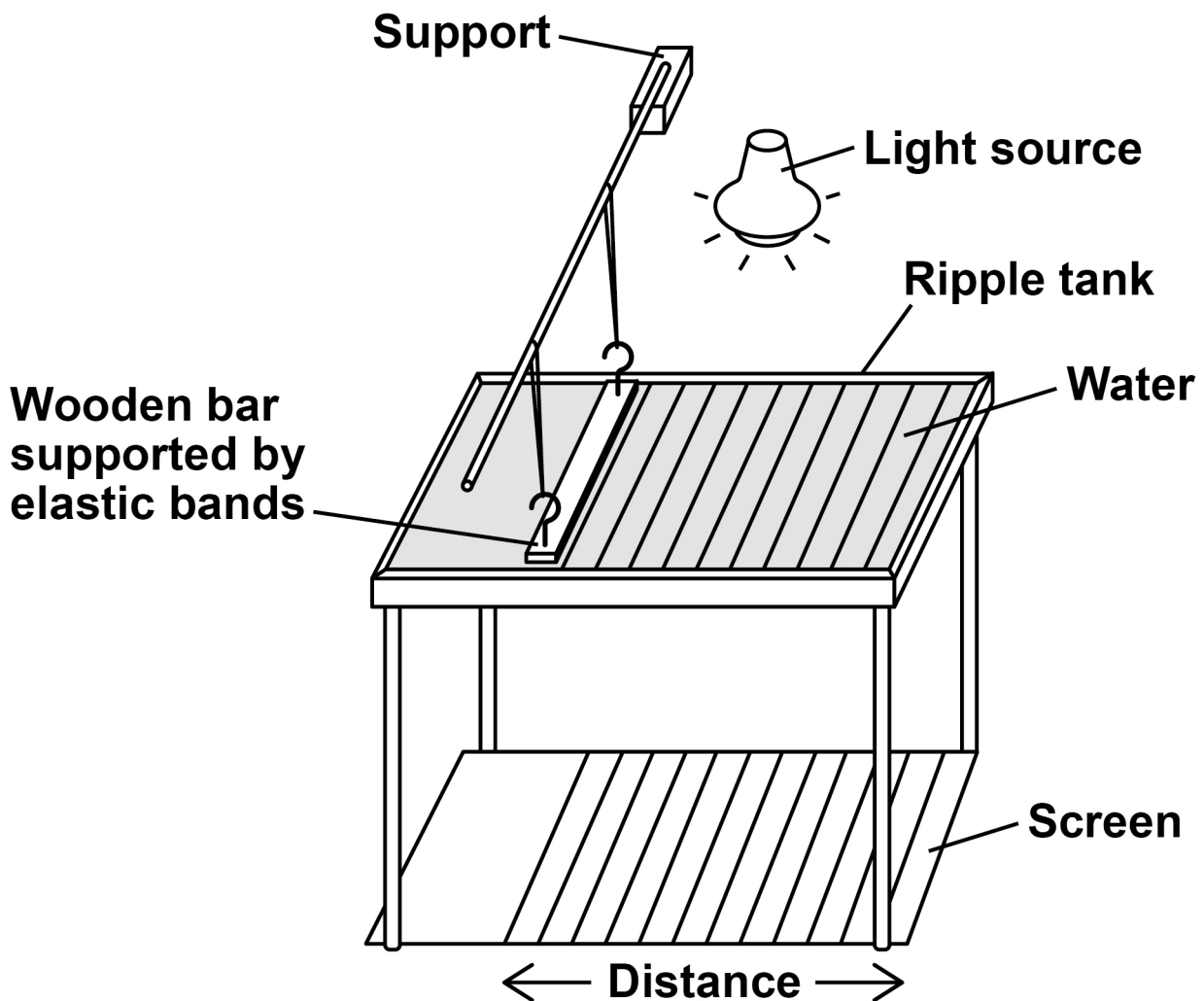
02

FIGURE 3 shows the equipment a teacher used to determine the speed of a water wave.

The equipment includes:

- a ripple tank filled with water
- a wooden bar that creates ripples on the surface of the water
- a light source which causes a shadow of the ripples on the screen.

FIGURE 3



**0 2 . 1** Describe how equipment in FIGURE 3 can be used to measure the wavelength, frequency and speed of a water wave. [6 marks]

---

---

---

---

---

---

---

---

---

---

---

---

---

---

---

---

---

---

---

---

---

---

---

---

---

---

---

---

---

---

---

---

**[Turn over]**

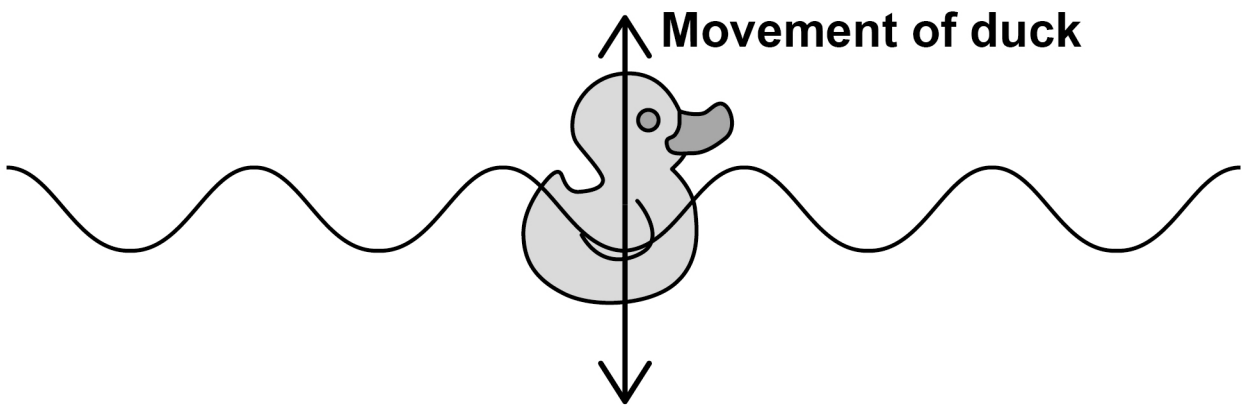




The teacher put a plastic duck in the ripple tank as shown in FIGURE 4.

The plastic duck moved up and down as the waves in the water passed.

FIGURE 4



**0 2 . 2** How does the movement of the plastic duck in FIGURE 4 demonstrate that water waves are transverse? [1 mark]

---

---

---

[Turn over]



- 02.3** The teacher measured the maximum height and the minimum height of the plastic duck above the screen as the wave passed.

The teacher repeated his measurements.

TABLE 2 shows the teacher's measurements.

**TABLE 2**

<b>Maximum height in mm</b>	<b>509</b>	<b>513</b>	<b>511</b>
<b>Minimum height in mm</b>	<b>503</b>	<b>498</b>	<b>499</b>





**03**

Some quantities are scalars and some are vectors.

**03****1**

Which of the following quantities are scalars?  
[2 marks]

Tick (✓) TWO boxes.

Displacement

Distance

Force

Speed

Velocity



**03.2** Give the difference between a vector quantity and a scalar quantity. [1 mark]

---

---

---

**[Turn over]**

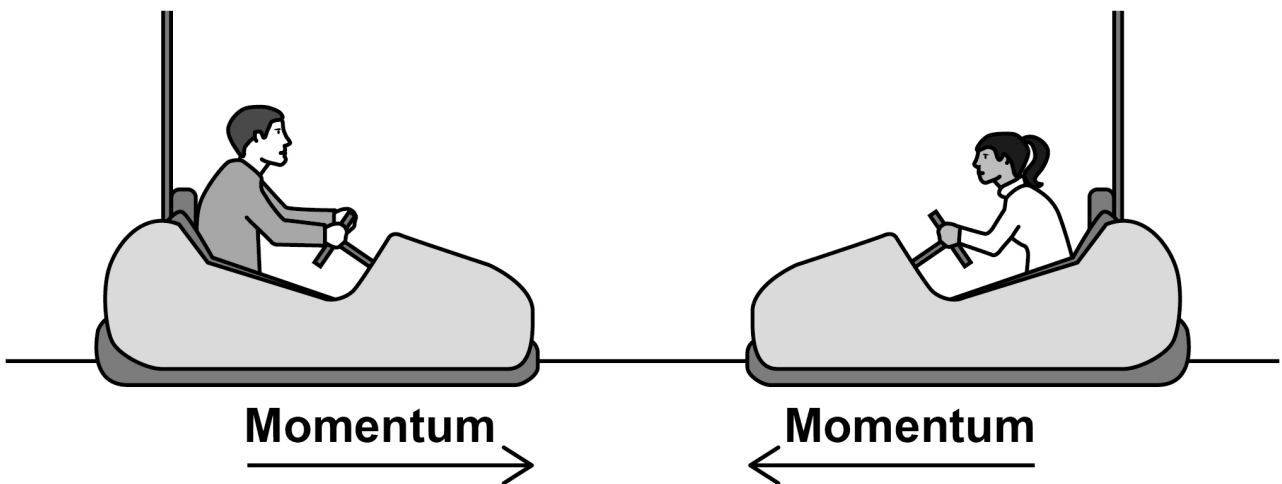


Bumper cars are a fairground ride and are designed to bump into each other.

FIGURE 5 shows two bumper cars moving towards each other.

The momentum of each bumper car is shown by an arrow.

FIGURE 5



**03.3** Give TWO factors that affect the momentum of each bumper car. [2 marks]

1 \_\_\_\_\_

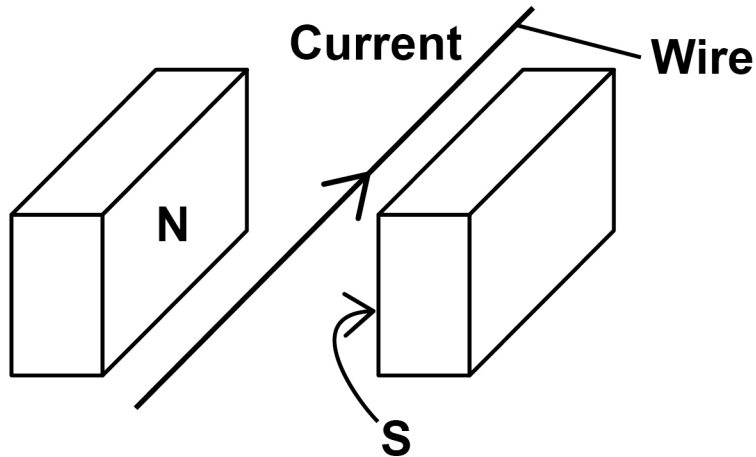
\_\_\_\_\_

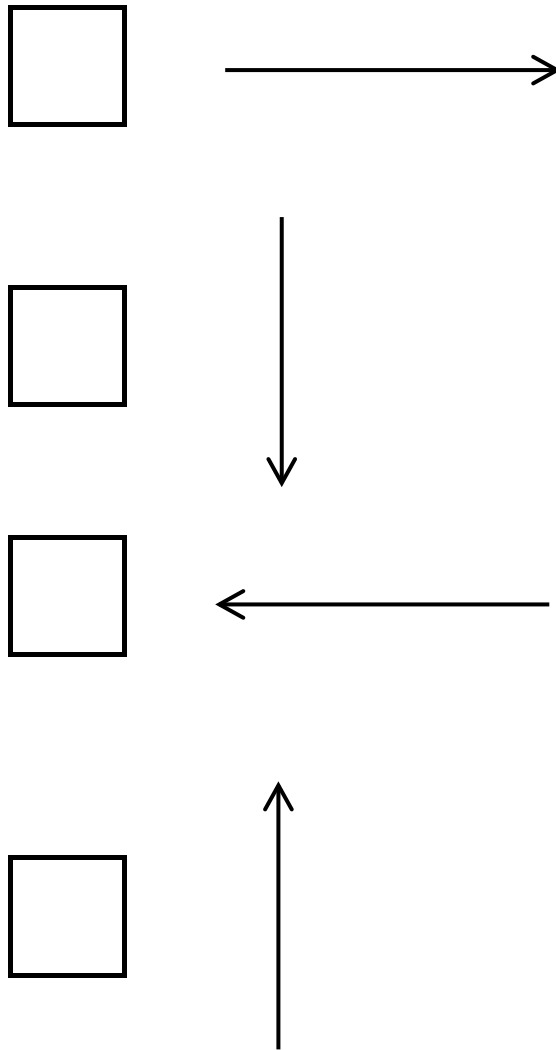
2 \_\_\_\_\_

\_\_\_\_\_





**0 4****FIGURE 6 shows a wire in a magnetic field.****The direction of the current in the wire is shown.****FIGURE 6****0 4 . 1****There is a force on the wire due to the current in the magnetic field.****In which direction is the force on the wire?  
[1 mark]****Tick (✓) ONE box on the opposite page.**



**04.2** Give TWO ways that the direction of the force on the wire could be reversed. [2 marks]

1 \_\_\_\_\_

2 \_\_\_\_\_

[Turn over]



**04.3** The length of the wire in the magnetic field is 0.050 m

The force on the wire is 0.072 N

magnetic flux density = 360 mT

Calculate the current in the wire.

Use the Physics Equations Sheet.

[4 marks]

---

---

---

---

---

---

---

---

---

---

---

---



---

---

---

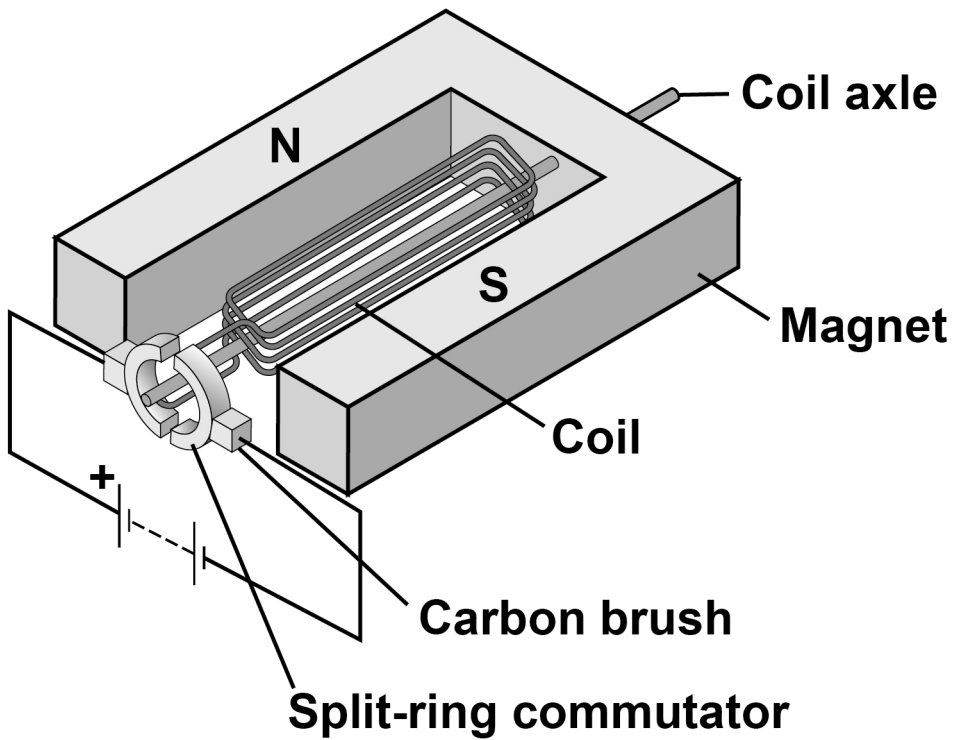
Current = \_\_\_\_\_ A

[Turn over]



**04.4** FIGURE 7 shows a simple motor.

**FIGURE 7**



**Explain why the coil rotates when there is a current in the coil. [4 marks]**

---

---

---

---



---

---

---

---

---

---

---

---

---

---

---

---

---

---

---

---

---

---

---

---

---

---

---

---

---


[Turn over]

11



**05**

**FIGURE 8** shows some springs inside a mattress.

**FIGURE 8****05****.1**

Which proportionality is true when a force is applied to a spring? [1 mark]

Tick (✓) ONE box.

Force  $\propto$  energy stored

Force  $\propto$  extension

Force  $\propto$  length

Force  $\propto$  spring constant



**BLANK PAGE**

**[Turn over]**



A mattress contains 1200 identical springs.

A person lies on the mattress and the springs compress.

The mean force on each spring in the mattress is 0.49 N

**0 5 . 2** Calculate the mass of the person.

gravitational field strength = 9.8 N/kg

[4 marks]

---

---

---

---

---

---

---

---

---

---

---

---

---

---

Mass = \_\_\_\_\_ kg

[Turn over]



**0 5 . 3** The mean compression of each spring is  $3.5 \times 10^{-3}$  m

Calculate the spring constant of each spring in the mattress.

Give the unit. [4 marks]

---

---

---

---

---

---

---

---

---

---

---

---

---

---

---

---

---

---

---

---

---

---

---

---

---

Spring constant = \_\_\_\_\_

Unit = \_\_\_\_\_





**05.4** For a given force, different springs compress by different amounts.

**Explain what property of the springs would make the mattress soft. [2 marks]**

---

---

---

---

---

---

---

**[Turn over]**

<b>11</b>

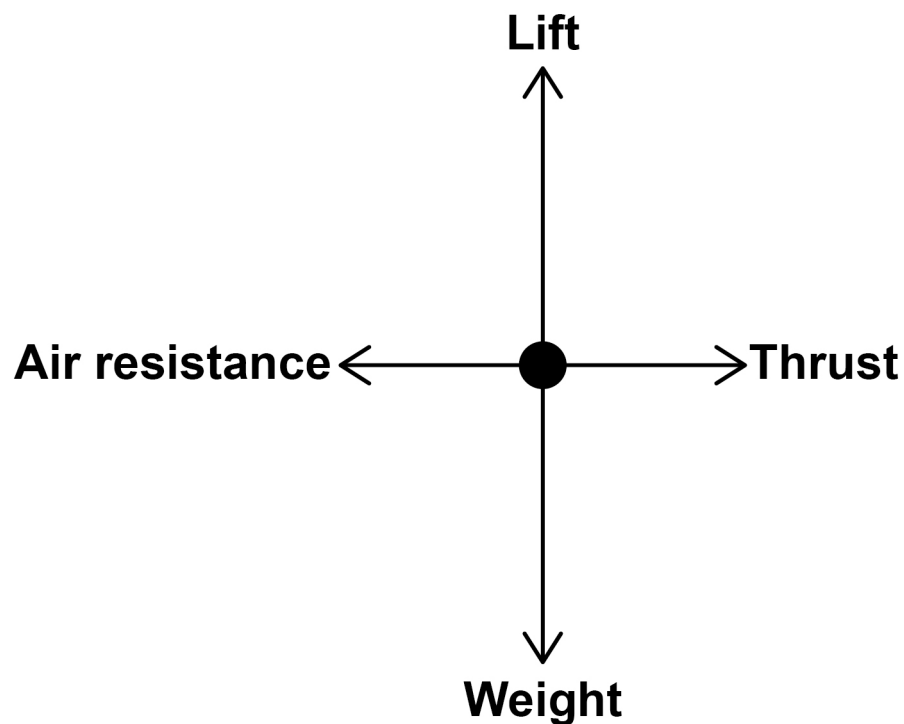


06

**FIGURE 9** shows a free body diagram for an aeroplane flying at a constant speed and at a constant height.

The speed of the aeroplane is much greater than the speed at which the aeroplane lands.

**FIGURE 9**



**06.1** Explain how the forces need to change so the aeroplane can land. [4 marks]

---

---

---

---

---

---

---

---

---

---

---

---

---

---

---

---

[Turn over]



**0 6 . 2** The aeroplane lands at a speed of 80 m/s

**After landing, the aeroplane takes 28 s to decelerate to a speed of 10 m/s**

**The mean resultant force on the aeroplane as it decelerates is 750 000 N**

**Calculate the mass of the aeroplane.  
[5 marks]**

---

---

---

---

---

---

---

---

---

---

---

---

---

---

---

---

---

---

---

---

---

---

---

---

---

---

---

---

---

Mass = \_\_\_\_\_ kg

[Turn over]

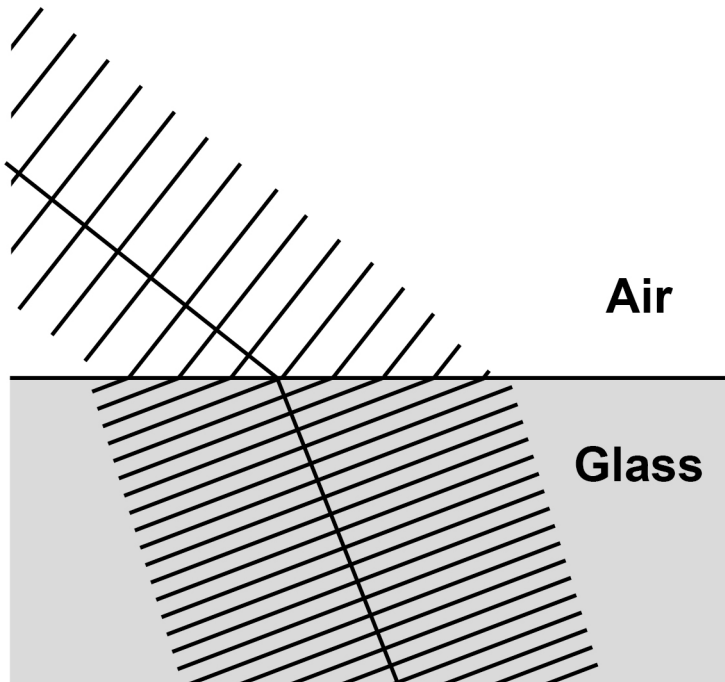
9



07

Wave front diagrams are used to explain why light refracts when it passes from air into glass.

FIGURE 10



**07.1** Explain why the light refracts as it passes from air into glass. [3 marks]

---

---

---

---

---

---

---

---

---

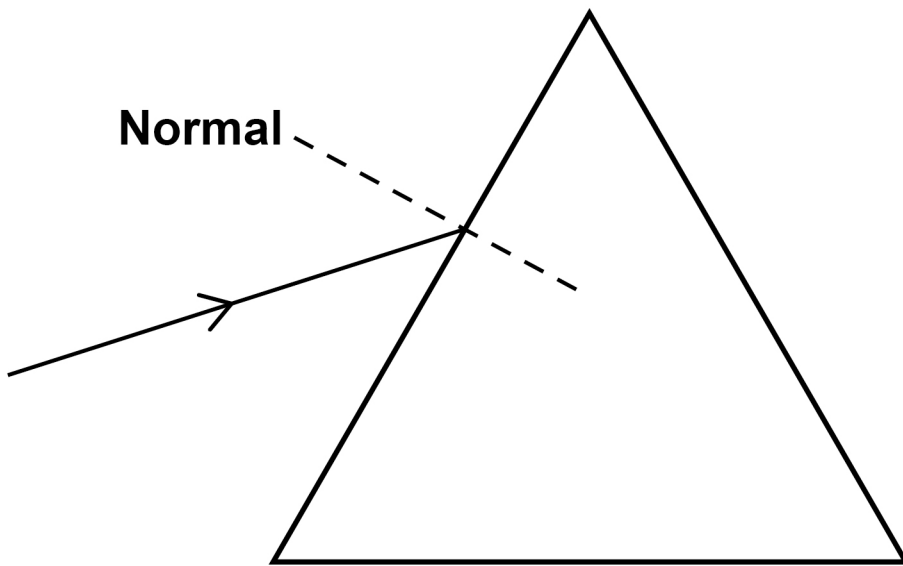
---

---

**[Turn over]**

**07.2** FIGURE 11 shows a ray of red light entering a glass prism.

**FIGURE 11**



**Complete the ray diagram to show the ray emerging from the glass prism. [3 marks]**





**BLANK PAGE**

**[Turn over]**



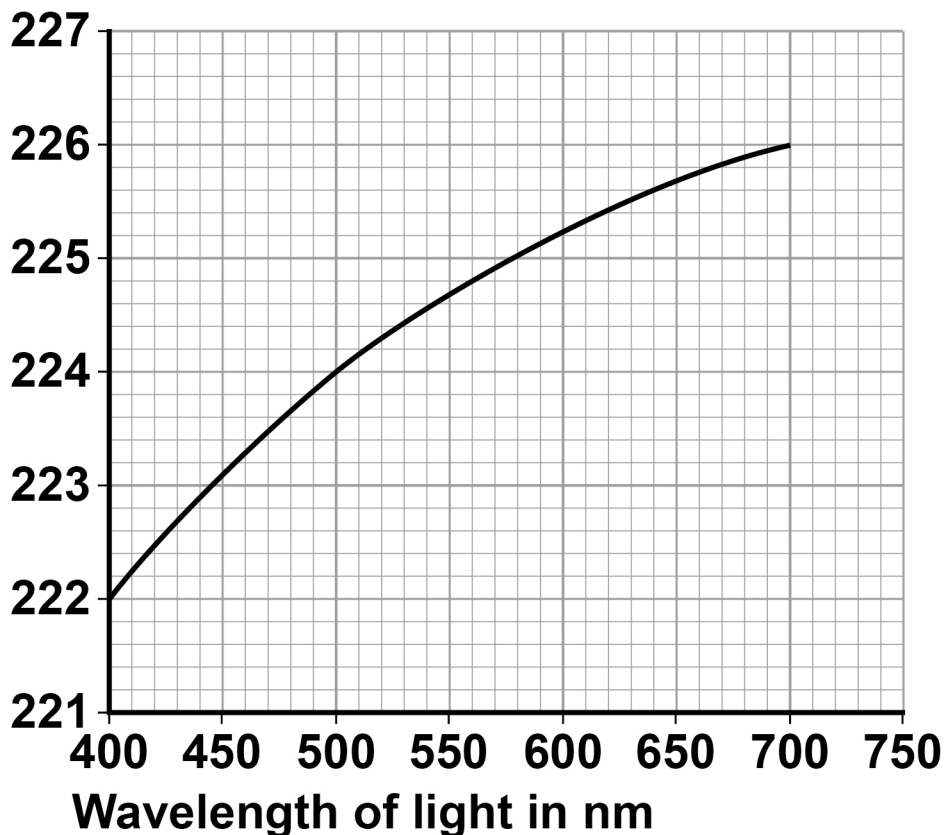
- 07.3** White light is made up of a continuous spectrum of different wavelengths that all travel at  $3 \times 10^8$  m/s in air.

Rainbows are produced because different wavelengths of light travel at different speeds in water.

FIGURE 12 shows the speed of different wavelengths of light in water.

**FIGURE 12**

Speed of  
light in water  
 $\times 10^6$  m/s



**Explain why violet light is refracted the most as it enters water. [3 marks]**

---

---

---

---

---

---

---

---

---

---

---

**END OF QUESTIONS**

<b>9</b>



**BLANK PAGE**

For Examiner's Use	
Question	Mark
1	
2	
3	
4	
5	
6	
7	
<b>TOTAL</b>	

**Copyright information**

For confidentiality purposes, from the November 2015 examination series, acknowledgements of third-party copyright material are published in a separate booklet rather than including them on the examination paper or support materials. This booklet is published after each examination series and is available for free download from [www.aqa.org.uk](http://www.aqa.org.uk) after the live examination series.

Permission to reproduce all copyright material has been applied for. In some cases, efforts to contact copyright-holders may have been unsuccessful and AQA will be happy to rectify any omissions of acknowledgements. If you have any queries please contact the Copyright Team, AQA, Stag Hill House, Guildford, GU2 7XJ.

Copyright © 2019 AQA and its licensors. All rights reserved.

**IB/M/JW/Jun19/8464/P/2H/E3**